


# Odds and Evens


Circle the even number shape.



Draw an odd number of counters on the ten-frame.



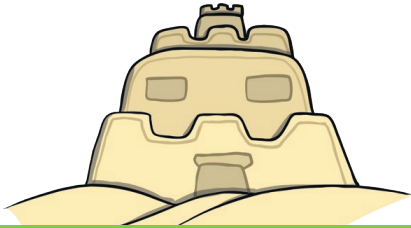
How many children are there?  
Is it an odd or even number?



odd

even

Draw an even number of flags on the sandcastle.



1 2 3 4 5  
6 7 8 9 10



# Measures

Which toy is lightest? Circle it.



Draw a flower taller than this one.



Which ball went the furthest? Circle it.



Circle the bottle that is nearly full.



1 2 3 4 5  
6 7 8 9 10




# Measures


Which child is the shortest?



Which jar has the least in?



Which worms are the same length? Circle them.



A girl measured her footprint. How many cubes long is it?



1 2 3 4 5  
6 7 8 9 10




# Maths Activity Mat

Count the stars in the sky.




Add 3 more teddies to the shelf.




How many teddies are there altogether?

Double the number of cars.



Which bike is nearest to the finish line? Circle it.



1 2 3 4 5  
6 7 8 9 10

