


Maths Activity Mats

Which numbers come next?

2 3 4

Can you work out the answer?



Which activity would you do at night time?
Circle it.



Which picture comes next in the pattern? Circle it.



1 2 3 4 5 6 7 8 9 10

Maths Activity Mats



Can you write **one more** and **one less** than 12?



one less

one more

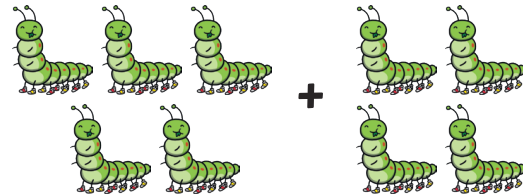
Which shape has **4 sides**? Circle it.



How much money is in the purse?




Can you work out the answer?



1 2 3 4 5 6 7 8 9 10

Maths Activity Mats

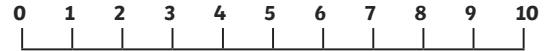
Can you **estimate** how many bees there are?




Count and check.

Can you work out the answer?

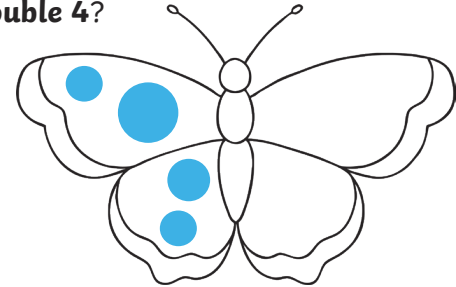
$$4 + 3 = \square$$



How many spots does each ladybird have?



What is **double 4**?



1 2 3 4 5 6 7 8 9 10

Maths Activity Mats

Can you draw a **triangle**?

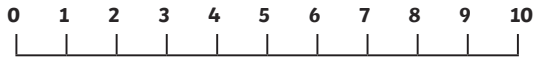
How many corners does it have?

Which number comes next?


8 9 10

Can you work out the answer?

$$6 + 2 = \square$$



Which snake is the **longest**? Circle it.



1 2 3 4 5 6 7 8 9 10